



ILLUMINATING GLOBAL EDUCATION THROUGH INDIANIC VALUES

# NEW STANDARD GROUP OF INSTITUTES



Name :- .....

Class :- 3<sup>rd</sup> ..... Sec. ....


Branch:- .....

हिन्दी-

1. अपनी 'निर्झर मोती' सुलेख पुस्तिका को प्रतिदिन एक पृष्ठ लिखकर पूर्ण करें।
2. 'दैनिक दिनचर्या' पर पाँच पंक्तियाँ अपनी व्याकरण कापी में लिखिए।
3. निम्न शब्दों के विलोम शब्द लिखिए।

काला	आज	दिन
<input type="text"/>	<input type="text"/>	<input type="text"/>

4. पेड़ पर संज्ञा शब्दों के साथ कुछ अन्य शब्द भी हैं। कृपया संज्ञा शब्दों को छाँटकर दिए गए स्थान पर लिखिए।



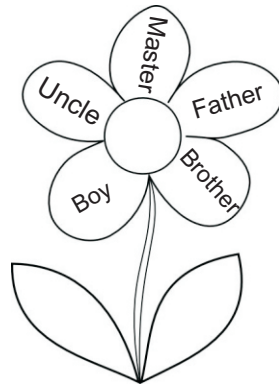
<input type="text"/>
<input type="text"/>
<input type="text"/>
<input type="text"/>
<input type="text"/>

**English:**

Q.1- Make the plural:

- |               |                      |           |                      |
|---------------|----------------------|-----------|----------------------|
| (a) City      | <input type="text"/> | (b) Thief | <input type="text"/> |
| (c) Story     | <input type="text"/> | (d) Brush | <input type="text"/> |
| (e) Gentleman | <input type="text"/> |           |                      |

Q.2- Write the feminine gender of the given words:



<input type="text"/>
<input type="text"/>
<input type="text"/>
<input type="text"/>
<input type="text"/>

Q.3- Write 10 lines about "Summer Vacation" in your N.B.

Q.4- Complete your cursive writing book by doing one page daily.

**Maths:**

Q.1- Write the number in words:

(a) 2340 \_\_\_\_\_

(b) 8760 \_\_\_\_\_

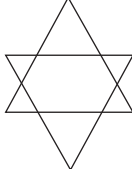
(c) 3876 \_\_\_\_\_

(d) 2984 \_\_\_\_\_

(e) 3827 \_\_\_\_\_

Q.2- How many triangles are there in each of the following figures:

(a)  \_\_\_\_\_

(b)  \_\_\_\_\_

Q.3- Match the following:

Half past 10                      10 : 15

Quarter past 10                  10:30

Quarter to 10                    2 × 4

2 + 2 + 2 + 2                    9 : 45

Q.4- Add the following:

(a) 
$$\begin{array}{r} 9 \quad 0 \quad 7 \quad 4 \\ + 6 \quad 6 \quad 3 \quad 9 \\ \hline \end{array}$$

(b) 
$$\begin{array}{r} 7 \quad 6 \quad 3 \quad 5 \\ + 8 \quad 6 \quad 4 \quad 7 \\ \hline \end{array}$$

(c) 
$$\begin{array}{r} 2 \quad 5 \quad 7 \quad 6 \\ + 1 \quad 9 \quad 6 \quad 2 \\ \hline \end{array}$$

(d) 
$$\begin{array}{r} 2 \quad 6 \quad 3 \quad 8 \\ + 2 \quad 9 \quad 4 \quad 7 \\ \hline \end{array}$$

Q.5- Arrange in descending order:

(a) 238, 576, 840, 270

---

(b) 980, 328, 300, 732

---

(c) 849, 832, 267, 876

---

(d) 276, 328, 300, 732

---

Q.6- Draw lines of 3 numbers that add together to make 10. The lines can be row and column both. Solve the puzzle then write the answer of given questions:

7	2	4	5	1
3	5	1	6	3
0	3	7	4	5
4	1	5	0	2
6	2	9	1	3

(a) What is the highest total of 3 numbers in row and column you can find? \_\_\_\_\_

(b) What is the lowest total of 3 numbers in row and column you can find? \_\_\_\_\_

Q.7- Write the predecessor of the following:

(a) 2321 \_\_\_\_\_

(b) 7000 \_\_\_\_\_

(c) 8549 \_\_\_\_\_

(d) 2476 \_\_\_\_\_

**EVS:**

Q.1- What kind of work people do in your neighbourhood? Name any five. What are these workers called?

Work	What they are called
_____	_____
_____	_____
_____	_____
_____	_____
_____	_____

**EVS:**

Q.2- Name five things which you can do without water.

---

---

---

---

---

Q.3- Name the members of your family and write their relation also in the table:

Members Name	Relation
<hr/>	<hr/>
<hr/>	<hr/>
<hr/>	<hr/>
<hr/>	<hr/>
<hr/>	<hr/>
<hr/>	<hr/>

Q.4- Draw diagrams (at least 3) of External and Internal organ of our body and write about it in your E.V.S. Note book.

**G.K.:**

Q.1- What is the name of fourth planet in our solar system?

Ans. \_\_\_\_\_

Q.2- Which is the recently made state in India?

Ans. \_\_\_\_\_

**Computer:**

Q.1- How to start and shutdown a computer. Write steps in note book.

Q.2- Rearrange the jumble words:

- (a) MNIIMZEI \_\_\_\_\_
- (b) CYRECEL \_\_\_\_\_
- (c) NTEROWK \_\_\_\_\_
- (d) SACNENR \_\_\_\_\_
- (e) EAESRR \_\_\_\_\_

**Art:**

Q.1- Draw and colour Flower Pot in Art note book.

Q.2- Collect some pencil shavings and make a bunch of flowers by it in Art note book. (P.T.O)

**New Standard Public School  
Scrap Book Work  
Class - 3  
Subject : Computer**

**Page No. - 01**

My Project on	-	Computer mouse and its functions
Prepared Under the Guidance of	-	_____
Prepared by	-	_____
Class	-	3 <sup>rd</sup>
Submitted on	-	_____

**Page No. - 02**

**Introduction:**

Computer mouse is an input device. It is a small device used to select and open items on a computer screen with the help of a mouse pointer. It has two or three buttons and a scrolling wheel.

**Page No. - 03**

**Types of computer mouse:**

**(1) Scroll Mouse:**

Scroll mouse has a small wheel present between the left and right buttons of a mouse.

**(2) Ball Mouse:**

It has a ball underside. When the ball moves on the mouse pad, the mouse pointer itself moves.

**(3) Optical Mouse:**

An optical mouse has a red light instead of a ball.

**Page No. - 04**

**Functions of Mouse:**

**1- Single Click:** Pressing the left mouse button once is called single click. It is used to select an item.

To click an icon, point to it on the screen and then press once and release the left button.

**Page No. - 05**

**Double Click:** Pressing the mouse button two times without releasing is called double click. It is used to open items.

To double click an icon, point to it on the screen and then quickly click twice.

**Page No. - 06**

**Dragging:** We can change place or move icons on our screen by dragging them.

To drag an icon:

- (i) Point to the icon on the screen.
- (ii) Press and hold the left button.
- (iii) Move the icon to a new location.
- (iv) Release the left button.

**Page No. - 07**

**Conclusion:** So we know that mouse is an input device that is used for completing various tasks in the computer such as:

- (i) To point and select objects on the screen.
- (ii) Select and /or move data or files by dragging.
- (iii) Execute programs, or open files.